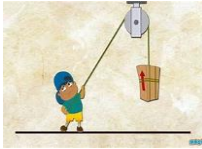

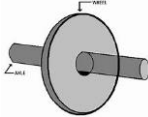

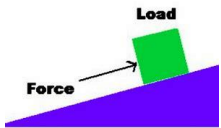
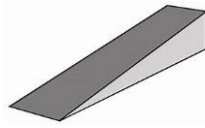


Name _____

How many simple machines can you find around school or at home?! Try to find at least two of each machine and list them below each picture.

<p style="text-align: center;">Pulleys</p>  <p style="text-align: center;">pulley simple machines - Bing images</p> <p>1. _____</p> <p>2. _____</p>	<p style="text-align: center;">Levers</p>  <p style="text-align: center;">lever simple machines - Bing images</p> <p>1. _____</p> <p>2. _____</p>
<p style="text-align: center;">Wheel and Axle</p>  <p style="text-align: center;">wheel and axle simple machine examples - Bing images</p> <p>1. _____</p> <p>2. _____</p>	<p style="text-align: center;">Screws</p>  <p style="text-align: center;">screw simple machine examples - Bing images</p> <p>1. _____</p> <p>2. _____</p>
<p style="text-align: center;">Inclined planes</p>  <p style="text-align: center;">inclined plane machine examples - Bing images</p> <p>1. _____</p> <p>2. _____</p>	<p style="text-align: center;">Wedges</p>  <p style="text-align: center;">wedge machine examples - Bing images</p> <p>1. _____</p> <p>2. _____</p>